





**RAPHELA JUNIOR SCHOOL  
EXERCISE THREE  
PRIMARY TWO LITERACY 1A**

1. Study the weather chart below and answer the questions that follow.

<p><b>Monday</b></p> 	<p><b>Tuesday</b></p> 
<p><b>Wednesday</b></p> 	<p><b>Thursday</b></p> 

(i) What is the weather condition on:

Monday: \_\_\_\_\_

Tuesday: \_\_\_\_\_

Wednesday: \_\_\_\_\_

Thursday: \_\_\_\_\_

(ii) On which day will you use gumboots? \_\_\_\_\_

2. Match animal to their movements correctly.

snake

wiggles

baby

swims

fish

flies

bird

glides

caterpillar

crawls

17. Write down the homes of the following animals.


pig \_\_\_\_\_

man \_\_\_\_\_

bird \_\_\_\_\_

fish \_\_\_\_\_

18. **Name the living things.**



19. a) Name any **two** physical activities done by people.

i) \_\_\_\_\_

ii) \_\_\_\_\_

b) Why do we do physical activities?

write yes / no

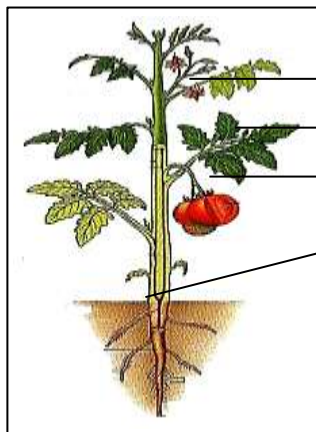
To run around \_\_\_\_\_

To be fit \_\_\_\_\_

To be strong \_\_\_\_\_

To grow \_\_\_\_\_

20. **Name the parts of the plant.**



i) \_\_\_\_\_

ii) \_\_\_\_\_

iii) \_\_\_\_\_

iv) \_\_\_\_\_

21. **Circle only immunisable diseases.**

Whooping cough

polio

flu





measles

AIDS

malaria

diphtheria

22. Study the list of animals given in the diagram below and answer the questions that follow.

			
<b>A</b>	<b>B</b>	<b>C</b>	<b>D</b>

(a) Name animal marked C.

---

(b) Which animal is different from the others in the list?

---

(c) Give a reason for your answer in (b) above.

---

23. How do we prevent the spread of malaria in our homes?

---

24. Draw and name three things we use to keep our bodies clean.

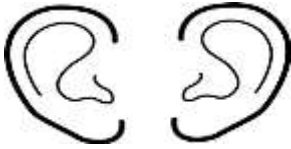

25. Name any one plant found in our school compound.

---

26. Match these body organs to their senses.



feeling



smelling



seeing



hearing



tasting

27. Calf is to cow as \_\_\_\_\_ is to goat.

28. Name any one place that must be kept clean at home.

\_\_\_\_\_

29. How can we use the tool below to promote sanitation?



\_\_\_\_\_

30. People use cow dung as \_\_\_\_\_